


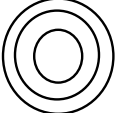



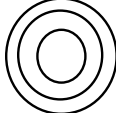
B	P=___ N=___ E=___	O S O L O G
	M.P. = ___ B.P. = ___	
Properties		
Uses		
Bohr Diagram Lewis Structure		
		B


H	P=___ N=___ E=___	O S O L O G
	M.P. = ___ B.P. = ___	
Properties		
Uses		
Bohr Diagram Lewis Structure		
		H

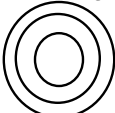
O	P=___ N=___ E=___	O S O L O G
	M.P. = ___ B.P. = ___	
Properties		
Uses		
Bohr Diagram Lewis Structure		
		O


P	P=___ N=___ E=___	O S O L O G
	M.P. = ___ B.P. = ___	
Properties		
Uses		
Bohr Diagram Lewis Structure		
		P

C	P=___ N=___ E=___	O S O L O G
	M.P. = ___ B.P. = ___	
Properties		
Uses		
Bohr Diagram Lewis Structure		
		C

Mg	P=___ N=___ E=___	O S O L O G
	M.P. = ___ B.P. = ___	
Properties		
Uses		
Bohr Diagram Lewis Structure		
		Mg

F	P=___ N=___ E=___	O S O L O G
	M.P. = ___ B.P. = ___	
Properties		
Uses		
Bohr Diagram Lewis Structure		
		F

Ar	P=___ N=___ E=___	O S O L O G
	M.P. = ___ B.P. = ___	
Properties		
Uses		
Bohr Diagram Lewis Structure		
		Ar

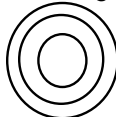
He	P=___ N=___ E=___	O S O L O G
	M.P. = ___ B.P. = ___	
Properties		
Uses		
Bohr Diagram Lewis Structure		
		He

Al	P=___	O S
	N=___	O L
	E=___	O G
M.P. = ___		
B.P. = ___		

Properties

Uses

Bohr Diagram Lewis Structure

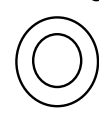

Al

N	P=___	O S
	N=___	O L
	E=___	O G
M.P. = ___		
B.P. = ___		

Properties

Uses

Bohr Diagram Lewis Structure



N

S	P=___	O S
	N=___	O L
	E=___	O G
M.P. = ___		
B.P. = ___		

Properties

Uses

Bohr Diagram Lewis Structure

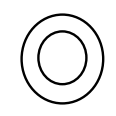

S

Li	P=___	O S
	N=___	O L
	E=___	O G
M.P. = ___		
B.P. = ___		

Properties

Uses

Bohr Diagram Lewis Structure

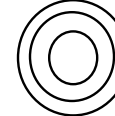

Li

Si	P=___	O S
	N=___	O L
	E=___	O G
M.P. = ___		
B.P. = ___		

Properties

Uses

Bohr Diagram Lewis Structure

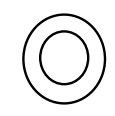

Si

Be	P=___	O S
	N=___	O L
	E=___	O G
M.P. = ___		
B.P. = ___		

Properties

Uses

Bohr Diagram Lewis Structure



Be

Na	P=___	O S
	N=___	O L
	E=___	O G
M.P. = ___		
B.P. = ___		

Properties

Uses

Bohr Diagram Lewis Structure

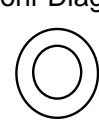

Na

Ne	P=___	O S
	N=___	O L
	E=___	O G
M.P. = ___		
B.P. = ___		

Properties

Uses

Bohr Diagram Lewis Structure



Ne

Cl	P=___	O S
	N=___	O L
	E=___	O G
M.P. = ___		
B.P. = ___		

Properties

Uses

Bohr Diagram Lewis Structure


Cl