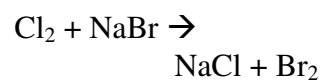


Equation Challenge Problems

#1

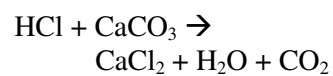


#2

Give the name and # of atoms for each element.



#3

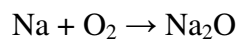


#4

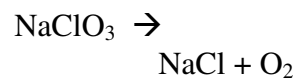
Give the name and # of atoms for each element.



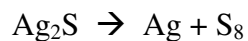
#5



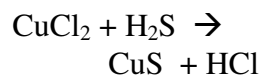
#6



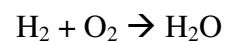
#7



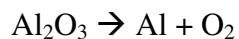
#8



#9

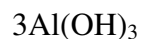


#10



#11

Give the name and # of atoms for each element.

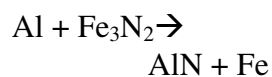


#12

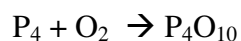
Give the name and # of atoms for each element.



#13

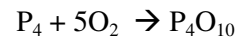


#14



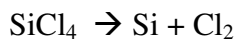
#15

What type of reaction is this?



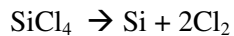
Equation Challenge Problems

#16

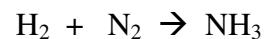


#17

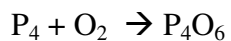
What type of
reaction is this?



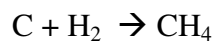
#18



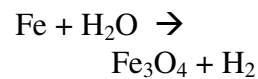
#19



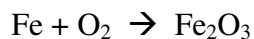
#20



#21

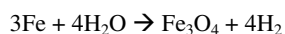


#22

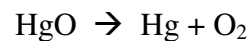


#23

What type of
reaction is this?



#24

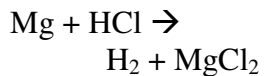


#25

Give the name of
this compound.



#26

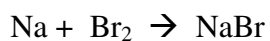


#27

Give the name of
this compound.



#28

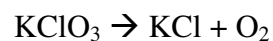


#29

Give the name of
this compound.



#30



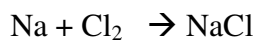
Equation Challenge Problems

#31

Give the name of
this compound.



#32

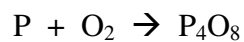


#33

Give the name of
this compound.

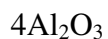


#34

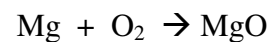


#35

Give the name and # of
atoms for each element.

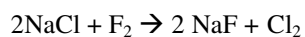


#36

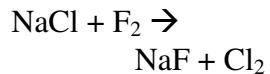


#37

What type of
reaction is this?



#38

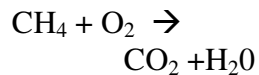


#39

Give the name of
this compound.

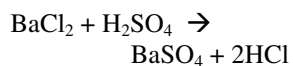


#40

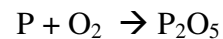


#41

What type of
reaction is this?



#42

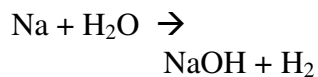


#43

Give the name of
this compound.



#44



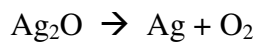
#45

Give the name and # of
atoms for each element.



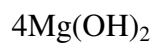
Equation Challenge Problems

#46

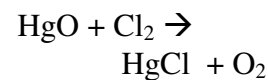


#47

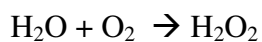
Give the name and # of atoms for each element.



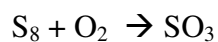
#48



#49



#50

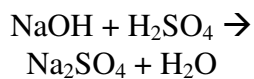


#51

Give the name and # of atoms for each element.



#52



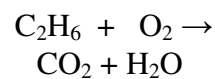
#53

Give the name and # of atoms for each element.



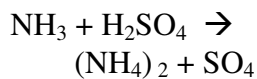
Bonus

★#54



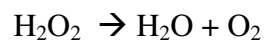
Bonus

★#55



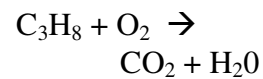
Bonus

★#56



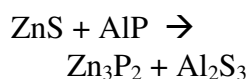
Bonus

★#57



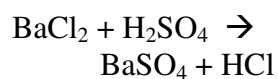
Bonus

★#58



Bonus

★#59



Bonus

★#60

